

# Friday Quiz

Name \_\_\_\_\_ April 16, 2021

Vocabulary \_\_\_\_/20 Math \_\_\_\_/38 Draw Math \_\_\_\_/8 ELA \_\_\_\_/

## Math – Directions: Solve for each. Show your work when possible. (Two points each)

### From Monday – Units of Time – 12.8 (See video!)

1 5 weeks = \_\_\_\_\_ days


3 3 years = \_\_\_\_\_ weeks

2 9 hours = \_\_\_\_\_ minutes

4 9 minutes = \_\_\_\_\_ seconds


### From Tuesday – Elapsed Time 12.9 - Draw a timeline. (See video!)

- 1 Aimee's karate class lasts 1 hour and 15 minutes and is over at 5:00 P.M. What time does Aimee's karate class start?



Draw a timeline & put answer in the box

- 2 Mr. Giarmo left for work at 7:15 A.M. Twenty-five minutes later, he arrived at his work. What time did Mr. Giarmo arrive at his work?



Draw a timeline & put answer in the box

### From Wednesday – Mixed Measurements – 12.10 (See video!)

1 5 weeks 3 days = \_\_\_\_\_ days

3 4 minutes 45 seconds = \_\_\_\_\_ seconds

2 4 hours 30 minutes = \_\_\_\_\_ minutes

4 3 tons 600 pounds = \_\_\_\_\_ pounds

### Skill Review - Memorize Measurement Patterns – 12.11 (See video!)

1 One pound = \_\_\_\_\_ ounces

2 One yard = \_\_\_\_\_ feet

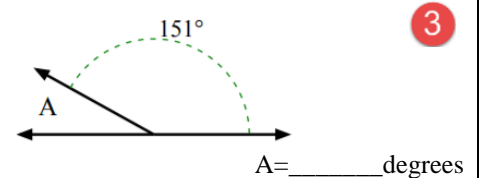
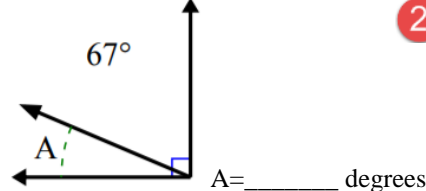
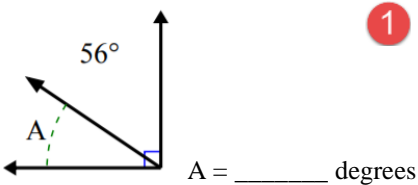
3 One foot = \_\_\_\_\_ inches

4 One cup = \_\_\_\_\_ ounces

5 One ton = \_\_\_\_\_ pounds

6 One gallon = \_\_\_\_\_ quarts

### Skill Review – Find missing degrees (See video)



Did you watch the videos? ☐ Of course! I'm smart like that. 😊 ☐ Nope! 😞

# Friday Quiz

## Math Drawing

Draw the following. Use a straight edge. Neatness counts! ([see video](#))

1 parallel lines

2 obtuse  $\angle ABC$


3 intersecting lines that are perpendicular

4 acute  $\angle RST$

## ELA

Read and choose the best answer. Draw a conclusion.

Veterans Day is celebrated on November 11. It honors soldiers who fought in wars for the United States. Observances take place all over the country. Some are held on battleships or at military bases. Others take place in cemeteries, churches, or government buildings. People give speeches, march in parades, and say prayers. For many people, red poppies are a symbol of Veterans Day. These flowers once grew on the battlefields of Europe during World War I (1914–1918) and are now symbols of the blood shed there and in other places.



- 1 From this paragraph you can conclude that
- (A) Veterans Day is a time of joyful feasting.
  - (B) most battles happen on fields of flowers.
  - (C) few communities celebrate Veterans Day.
  - (D) Veterans Day is a sad time for some people.

- 2 From the paragraph you **cannot** tell
- (A) why poppies are a symbol of Veterans Day.
  - (B) how many people have been lost in wars.
  - (C) how people observe Veterans Day.
  - (D) what month Veterans Day occurs in.

Did you watch the videos? ☐ Of course! I'm smart like that. 😊 ☐ Nope! 😞