

Math Galaxy Identifying Fractions Riddles eBook



--	--	--

$$\frac{2}{3} \quad \frac{12}{5} \quad 2\frac{4}{8}$$

--	--	--

$$\frac{9}{8} \quad \frac{8}{3} \quad \frac{2}{3}$$

--	--	--	--

$$2\frac{2}{8} \quad \frac{8}{3} \quad \frac{8}{3} \quad 1\frac{1}{3}$$

--	--	--	--

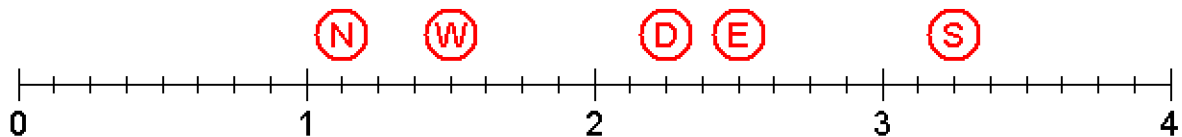
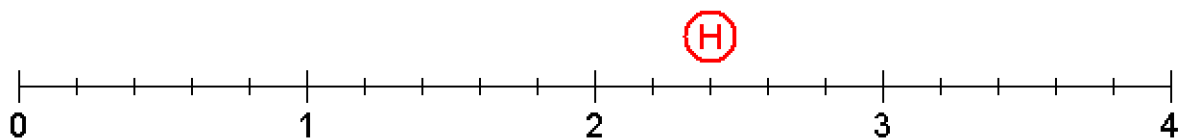
$$3\frac{2}{8} \quad \frac{12}{5} \quad 1\frac{2}{3} \quad \frac{2}{3}$$

--	--	--	--

$$1\frac{4}{8} \quad 3\frac{1}{3} \quad 3\frac{2}{3} \quad 3\frac{2}{3}$$

How can you tell if an elephant is in your refrigerator?

Place each letter in the box that shows its position on the line.




Copyright 2010 Gilbert Reilly
Galaxy of Education
www.MathGalaxy.com

All rights reserved. No part of this book may be reproduced or transmitted in any form or by any means, electronic or mechanical, or by any information storage or retrieval system, without permission in writing from the author, except as noted below.


Copying permission: Purchaser of this book may make copies of its pages for personal use or for use by students only, but not for resale or distribution to others.

Contents


Fraction Pies	4
Fractions on the Number Line	24



$$\frac{1}{3} \quad \frac{1}{4} \quad \frac{1}{2}$$



$$\frac{2}{3} \quad \frac{5}{9} \quad \frac{1}{2} \quad \frac{1}{4} \quad \frac{1}{5} \quad \frac{4}{7} \quad \frac{1}{3} \quad \frac{3}{4} \quad \frac{5}{9} \quad \frac{1}{5} \quad \frac{7}{8}$$

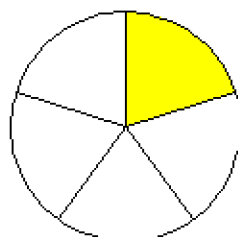


$$\frac{1}{3} \quad \frac{1}{5} \quad \frac{1}{6} \quad \frac{1}{2} \quad \frac{4}{7}$$

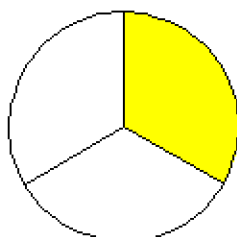
What newspaper did the cavemen read?

Place each letter in the box with that pie's fraction.

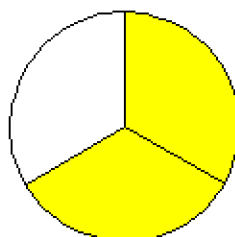
I



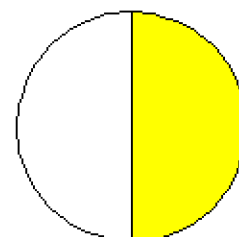
T



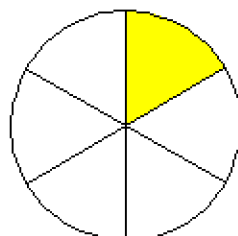
P



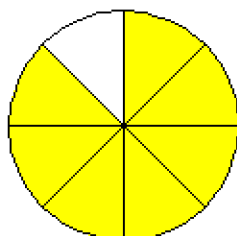
E



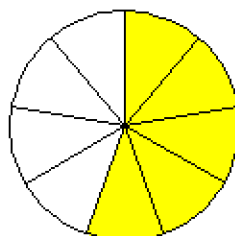
M



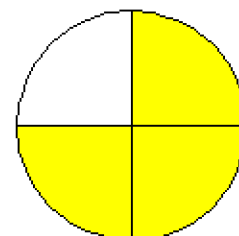
C



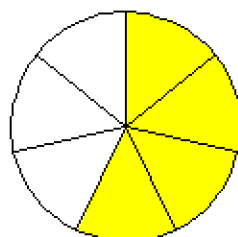
R



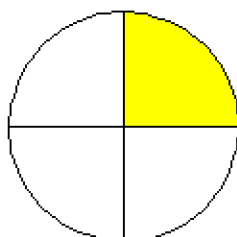
O



S



H



T H E

$\frac{1}{3}$ $\frac{1}{4}$ $\frac{1}{2}$

P R E H I S T O R I C

$\frac{2}{3}$ $\frac{5}{9}$ $\frac{1}{2}$ $\frac{1}{4}$ $\frac{1}{5}$ $\frac{4}{7}$ $\frac{1}{3}$ $\frac{3}{4}$ $\frac{5}{9}$ $\frac{1}{5}$ $\frac{7}{8}$

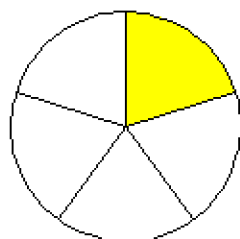
T I M E S

$\frac{1}{3}$ $\frac{1}{5}$ $\frac{1}{6}$ $\frac{1}{2}$ $\frac{4}{7}$

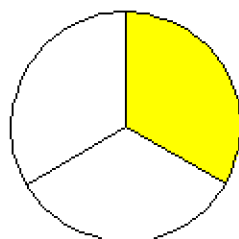
What newspaper did the cavemen read?

Place each letter in the box with that pie's fraction.

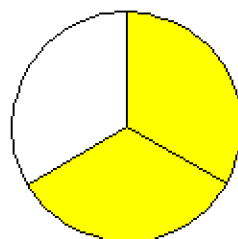
I



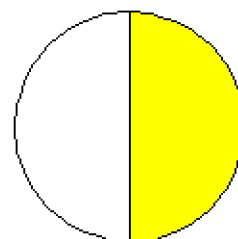
T



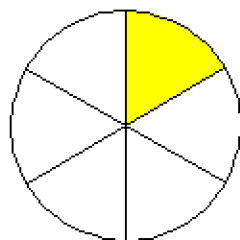
P



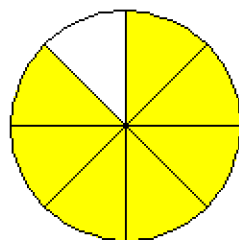
E



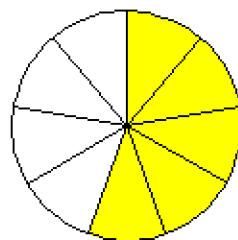
M



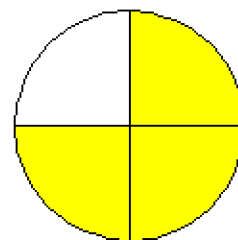
C



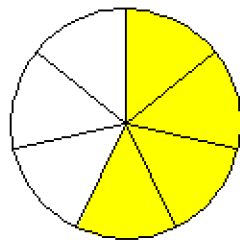
R



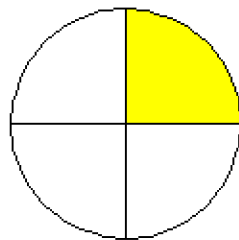
O

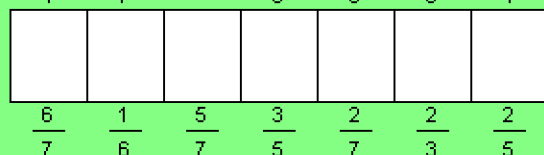
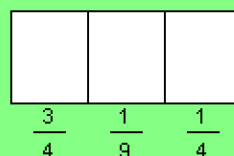
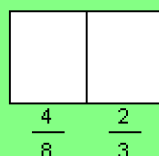
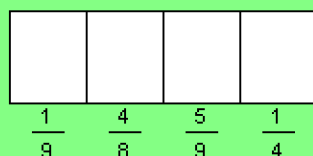
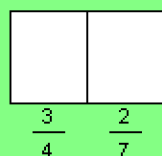


S



H

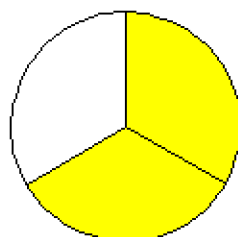




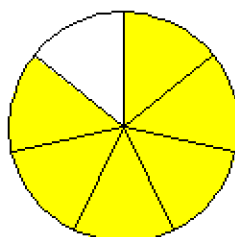
Why did the elephant paint herself different colors?

Place each letter in the box with that pie's fraction.

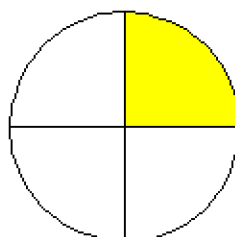
(N)



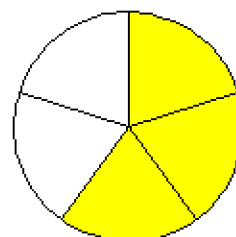
(C)



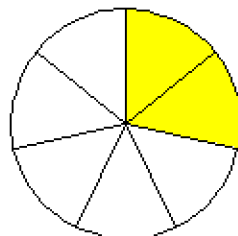
(E)



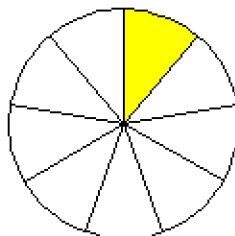
(Y)



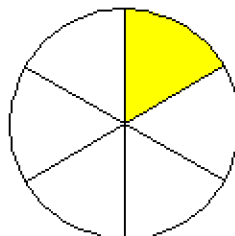
(O)



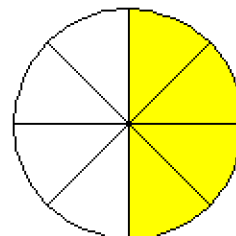
(H)



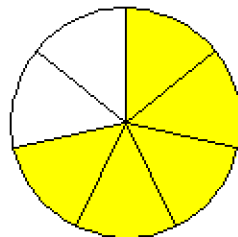
(R)



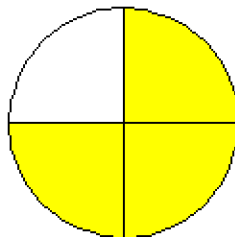
(I)



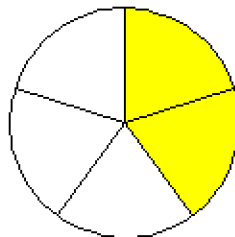
(A)



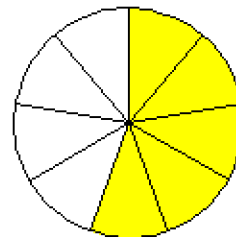
(T)



(S)



(D)



T O

$\frac{3}{4}$ $\frac{2}{7}$

H I D E

$\frac{1}{9}$ $\frac{4}{8}$ $\frac{5}{9}$ $\frac{1}{4}$

I N

$\frac{4}{8}$ $\frac{2}{3}$

T H E

$\frac{3}{4}$ $\frac{1}{9}$ $\frac{1}{4}$

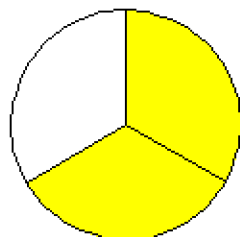
C R A Y O N S

$\frac{6}{7}$ $\frac{1}{6}$ $\frac{5}{7}$ $\frac{3}{5}$ $\frac{2}{7}$ $\frac{2}{3}$ $\frac{2}{5}$

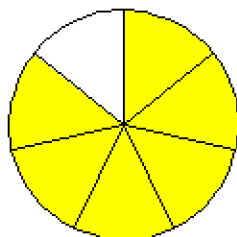
Why did the elephant paint herself different colors?

Place each letter in the box with that pie's fraction.

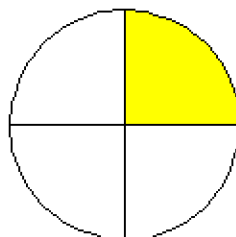
(N)



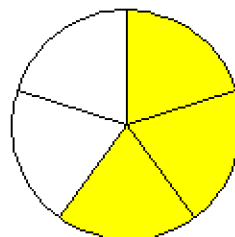
(C)



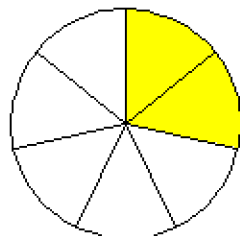
(E)



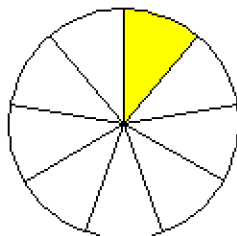
(Y)



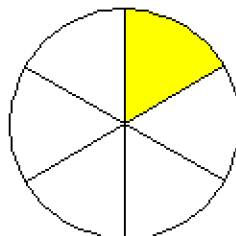
(O)



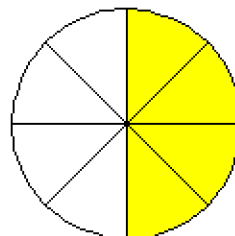
(H)



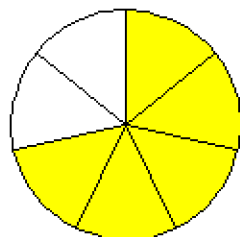
(R)



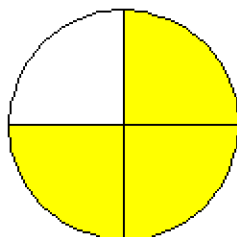
(I)



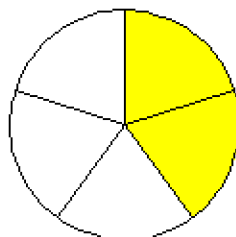
(A)



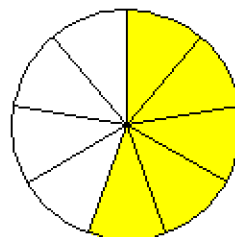
(T)

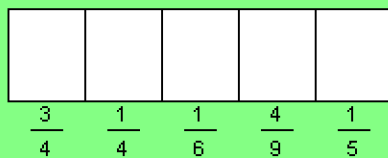
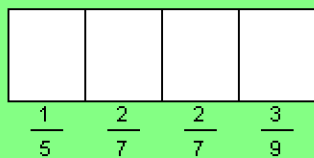


(S)



(D)

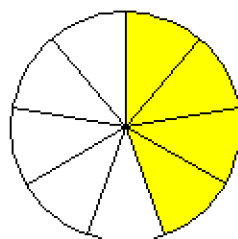




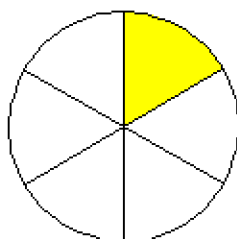
What would you get if you crossed a refrigerator with a stereo?

Place each letter in the box with that pie's fraction.

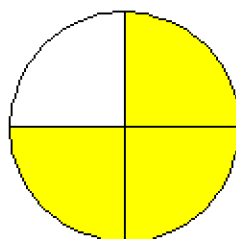
I



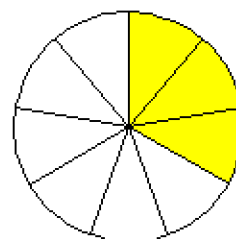
S



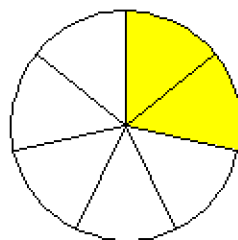
M



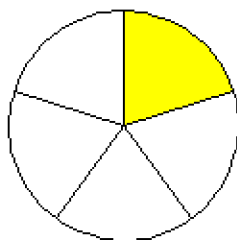
L



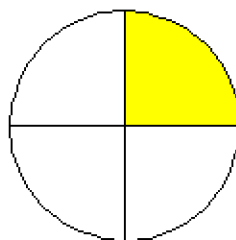
O

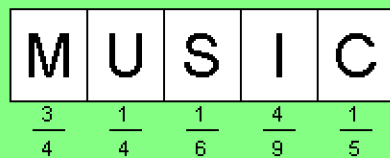
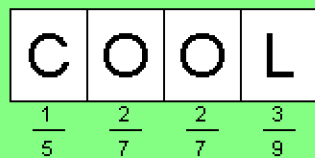


C



U

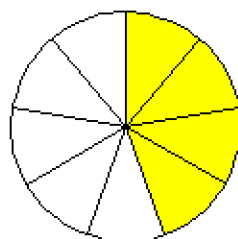




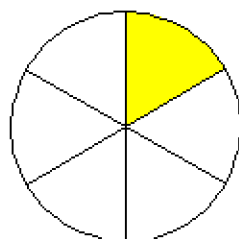
What would you get if you crossed a refrigerator with a stereo?

Place each letter in the box with that pie's fraction.

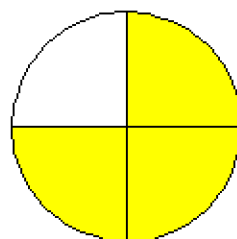
I



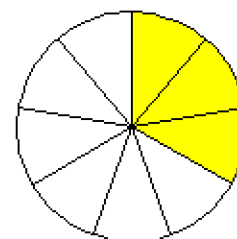
S



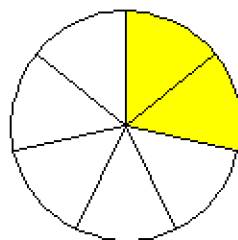
M



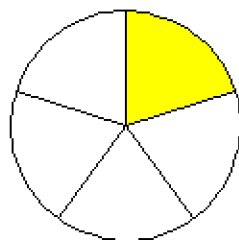
L



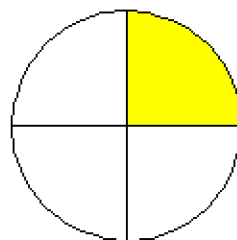
O

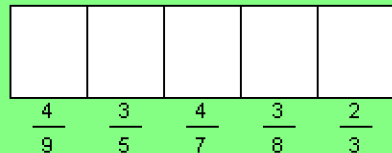
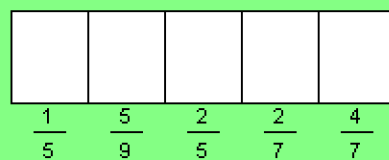
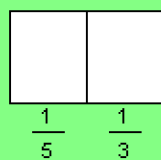
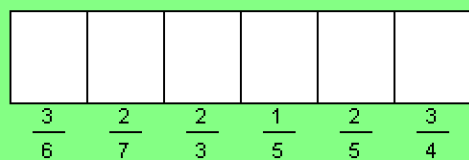


C



U

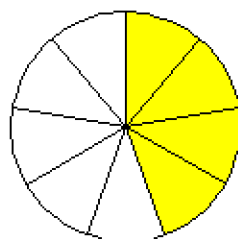




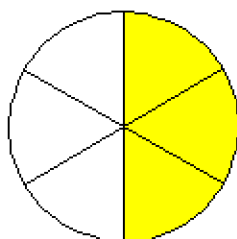
How can you tell one tree from another?

Place each letter in the box with that pie's fraction.

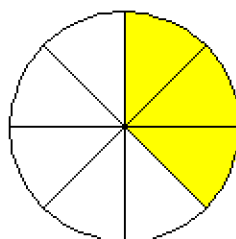
(B)



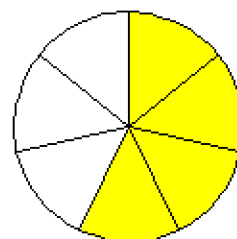
(L)



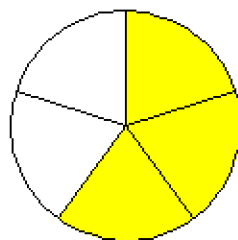
(K)



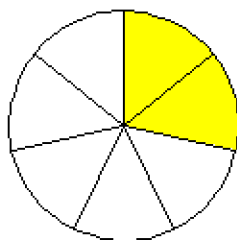
(R)



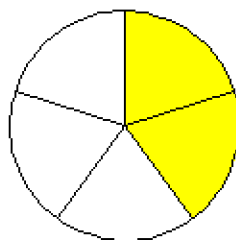
(A)



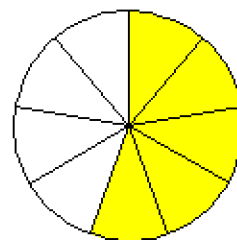
(I)



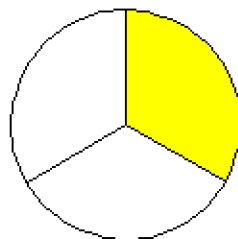
(E)



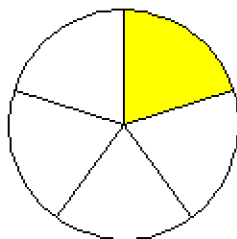
(H)



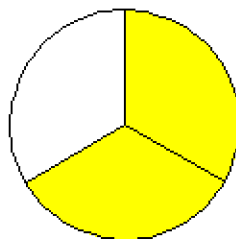
(O)



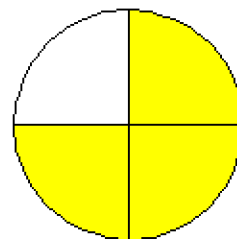
(T)



(S)



(N)



L I S T E N

$\frac{3}{6}$ $\frac{2}{7}$ $\frac{2}{3}$ $\frac{1}{5}$ $\frac{2}{5}$ $\frac{3}{4}$

T O

$\frac{1}{5}$ $\frac{1}{3}$

T H E I R

$\frac{1}{5}$ $\frac{5}{9}$ $\frac{2}{5}$ $\frac{2}{7}$ $\frac{4}{7}$

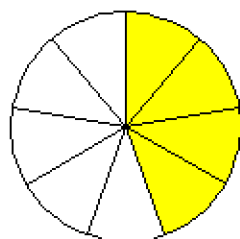
B A R K S

$\frac{4}{9}$ $\frac{3}{5}$ $\frac{4}{7}$ $\frac{3}{8}$ $\frac{2}{3}$

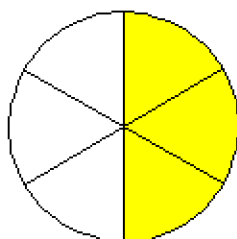
How can you tell one tree from another?

Place each letter in the box with that pie's fraction.

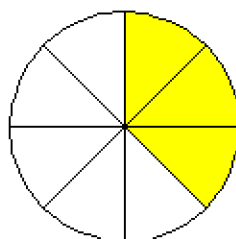
(B)



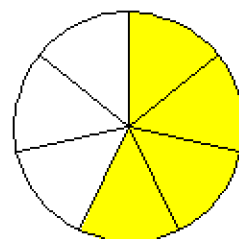
(L)



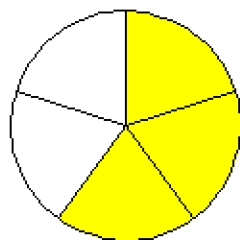
(K)



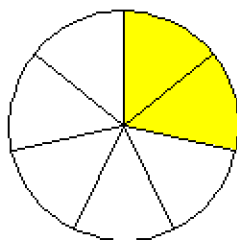
(R)



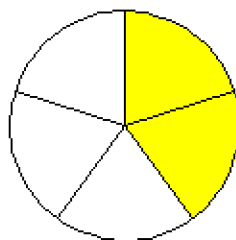
(A)



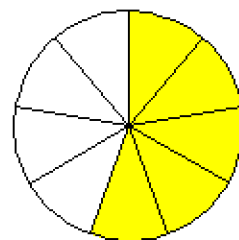
(I)



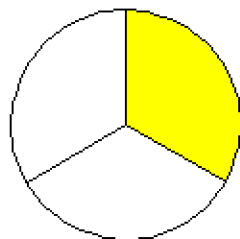
(E)



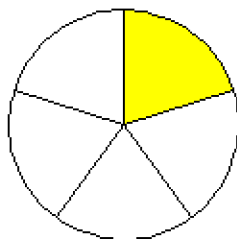
(H)



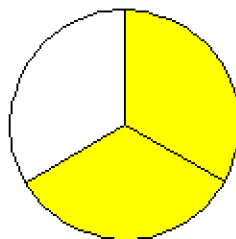
(O)



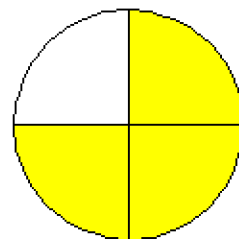
(T)




(S)




(N)






$\frac{5}{7}$ $\frac{1}{5}$ $\frac{2}{3}$ $\frac{6}{7}$



$\frac{1}{2}$ $\frac{2}{6}$ $\frac{6}{7}$



$\frac{1}{4}$ $\frac{1}{5}$ $\frac{6}{8}$ $\frac{2}{3}$ $\frac{6}{7}$ $\frac{1}{2}$

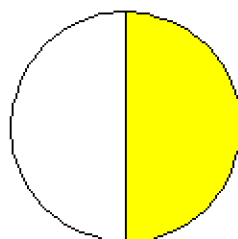


$\frac{7}{9}$ $\frac{3}{8}$ $\frac{2}{9}$ $\frac{4}{9}$ $\frac{1}{2}$

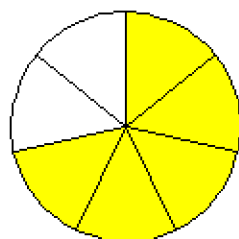
What is the best way to make pants last?

Place each letter in the box with that pie's fraction.

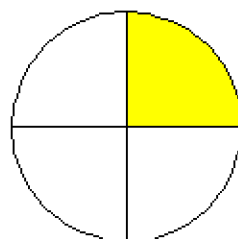
(T)



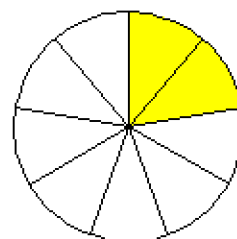
(M)



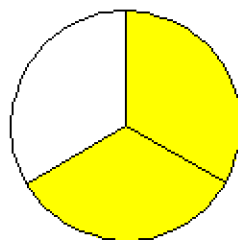
(J)



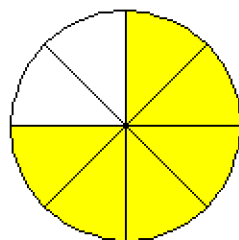
(R)



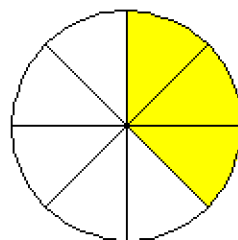
(K)



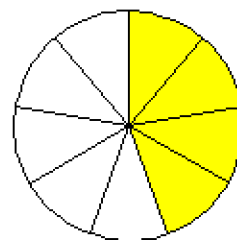
(C)



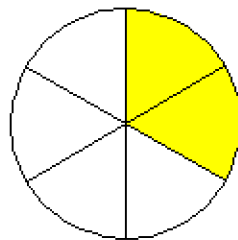
(I)



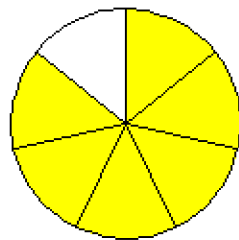
(S)



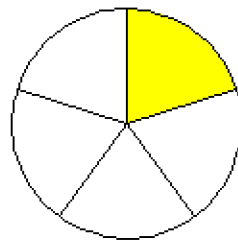
(H)



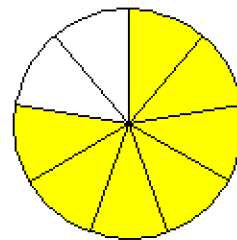
(E)



(A)



(F)



M A K E

$\frac{5}{7}$ $\frac{1}{5}$ $\frac{2}{3}$ $\frac{6}{7}$

T H E

$\frac{1}{2}$ $\frac{2}{6}$ $\frac{6}{7}$

J A C K E T

$\frac{1}{4}$ $\frac{1}{5}$ $\frac{6}{8}$ $\frac{2}{3}$ $\frac{6}{7}$ $\frac{1}{2}$

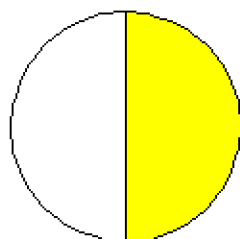
F I R S T

$\frac{7}{9}$ $\frac{3}{8}$ $\frac{2}{9}$ $\frac{4}{9}$ $\frac{1}{2}$

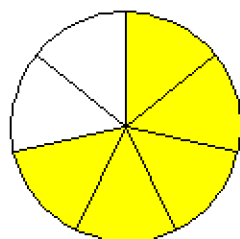
What is the best way to make pants last?

Place each letter in the box with that pie's fraction.

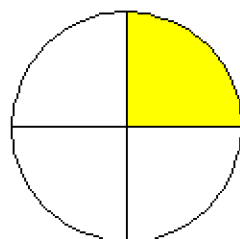
(T)



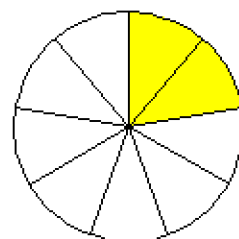
(M)



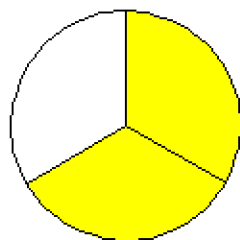
(J)



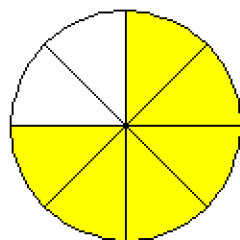
(R)



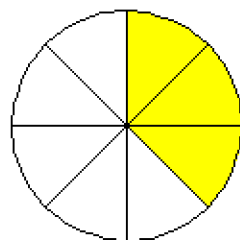
(K)



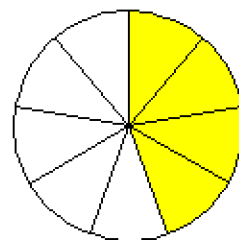
(C)



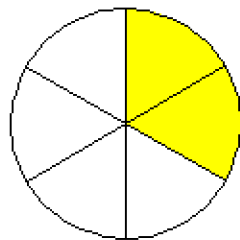
(I)



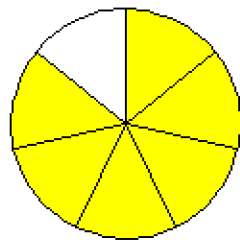
(S)



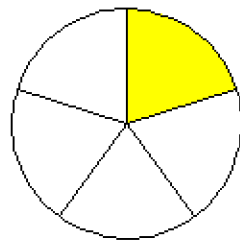
(H)



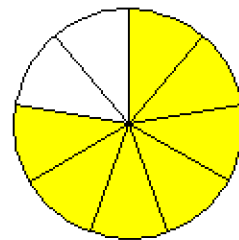
(E)




(A)




(F)







$$\frac{1}{9} \quad \frac{6}{9} \quad \frac{1}{2} \quad \frac{3}{9}$$



$$\frac{1}{8} \quad \frac{8}{9} \quad \frac{1}{9}$$



$$\frac{1}{9} \quad \frac{1}{7} \quad \frac{3}{9}$$

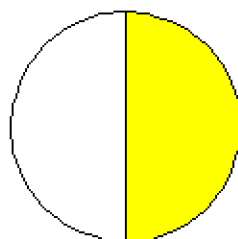


$$\frac{1}{9} \quad \frac{1}{8} \quad \frac{2}{8} \quad \frac{6}{9} \quad \frac{3}{4} \quad \frac{3}{4} \quad \frac{1}{8}$$

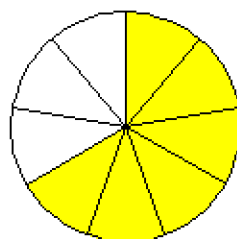
How do you make a cigarette lighter?

Place each letter in the box with that pie's fraction.

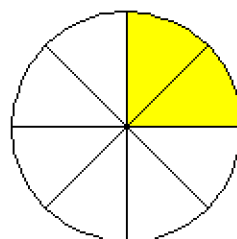
(K)



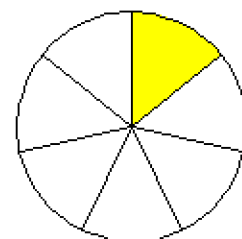
(A)



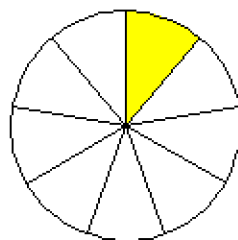
(B)



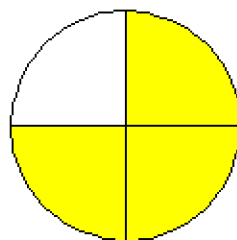
(H)



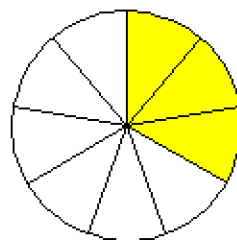
(T)



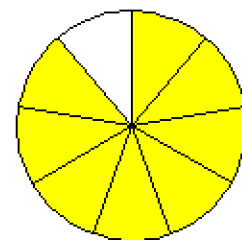
(C)



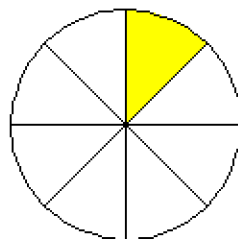
(E)



(U)



(O)



T A K E

$\frac{1}{9}$

$\frac{6}{9}$

$\frac{1}{2}$

$\frac{3}{9}$

O U T

$\frac{1}{8}$

$\frac{8}{9}$

$\frac{1}{9}$

T H E

$\frac{1}{9}$

$\frac{1}{7}$

$\frac{3}{9}$

T O B A C C O

$\frac{1}{9}$

$\frac{1}{8}$

$\frac{2}{8}$

$\frac{6}{9}$

$\frac{3}{4}$

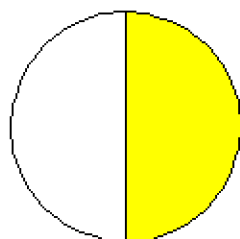
$\frac{3}{4}$

$\frac{1}{8}$

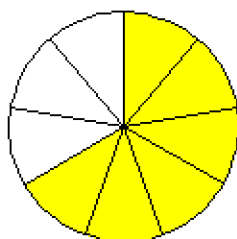
How do you make a cigarette lighter?

Place each letter in the box with that pie's fraction.

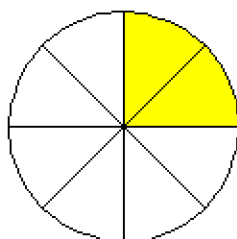
(K)



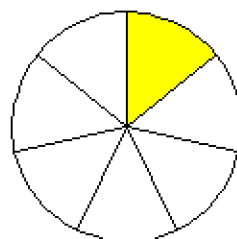
(A)



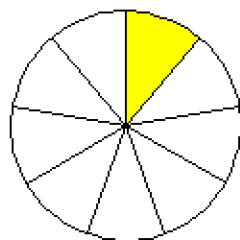
(B)



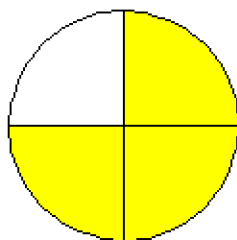
(H)



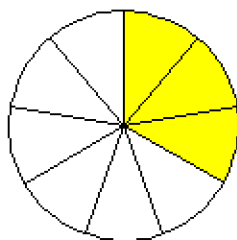
(T)



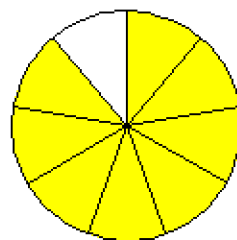
(C)



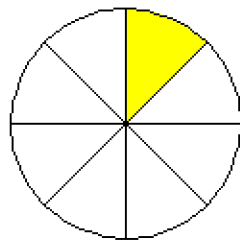
(E)



(U)




(O)






$\frac{1}{7}$ $\frac{1}{3}$ $\frac{2}{5}$ $\frac{3}{4}$



$\frac{5}{7}$ $\frac{2}{4}$ $\frac{1}{7}$ $\frac{1}{3}$



$\frac{1}{3}$ $\frac{3}{7}$ $\frac{8}{9}$ $\frac{2}{5}$

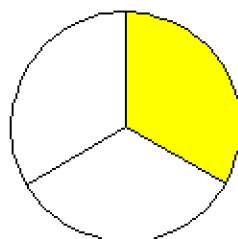


$\frac{5}{7}$ $\frac{3}{7}$ $\frac{4}{6}$ $\frac{1}{4}$ $\frac{4}{5}$

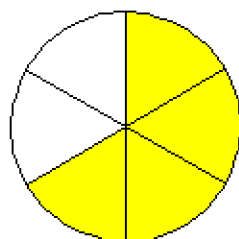
Why are dogs like trees?

Place each letter in the box with that pie's fraction.

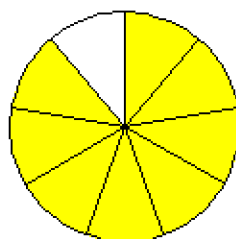
(H)



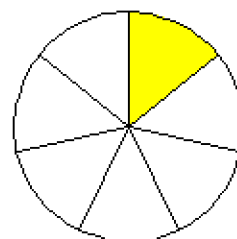
(R)



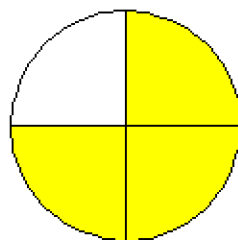
(V)



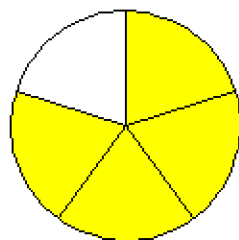
(T)



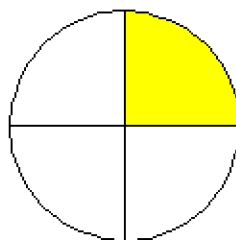
(Y)



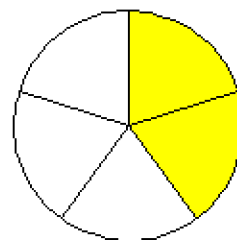
(S)



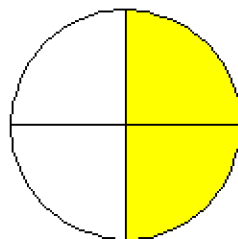
(K)



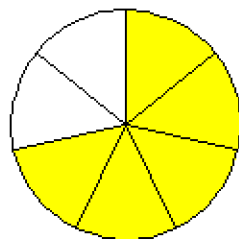
(E)



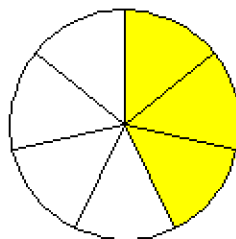
(O)



(B)



(A)



T H E Y

$\frac{1}{7}$

$\frac{1}{3}$

$\frac{2}{5}$

$\frac{3}{4}$

B O T H

$\frac{5}{7}$

$\frac{2}{4}$

$\frac{1}{7}$

$\frac{1}{3}$

H A V E

$\frac{1}{3}$

$\frac{3}{7}$

$\frac{8}{9}$

$\frac{2}{5}$

B A R K S

$\frac{5}{7}$

$\frac{3}{7}$

$\frac{4}{6}$

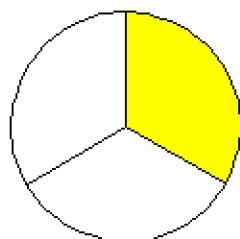
$\frac{1}{4}$

$\frac{4}{5}$

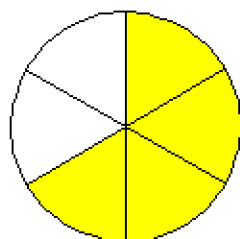
Why are dogs like trees?

Place each letter in the box with that pie's fraction.

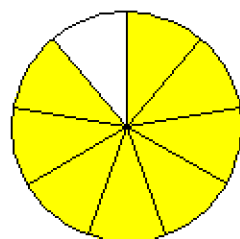
(H)



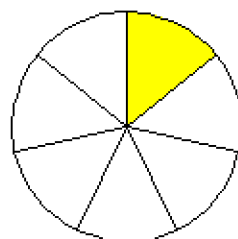
(R)



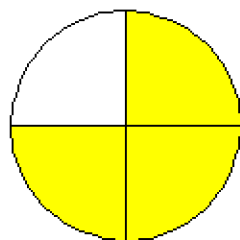
(V)



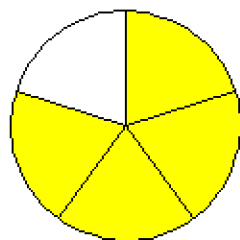
(T)



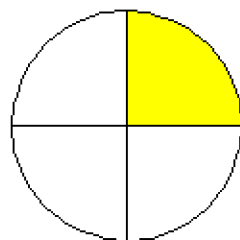
(Y)



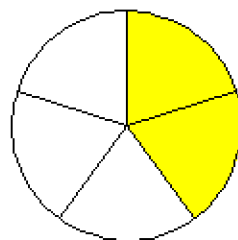
(S)



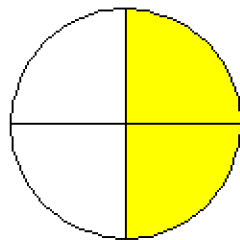
(K)



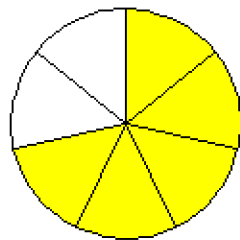
(E)



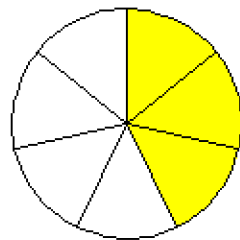
(O)

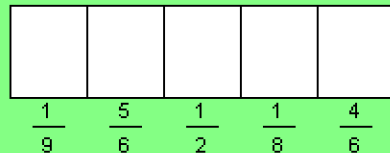
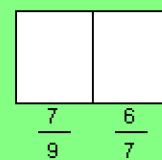
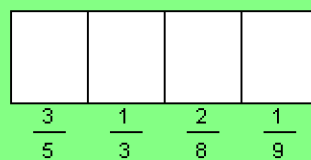
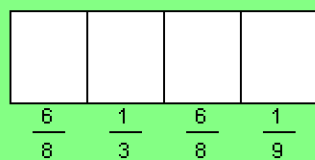


(B)



(A)

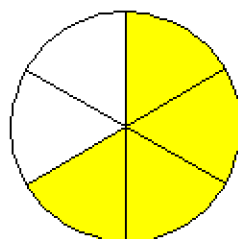




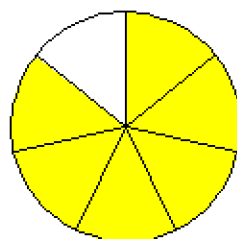
How much dirt is there in a hole 1 foot by 1 foot by 1 foot?

Place each letter in the box with that pie's fraction.

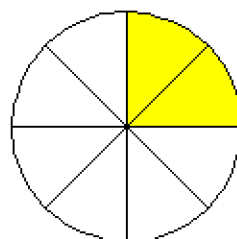
Y



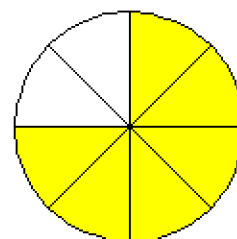
S



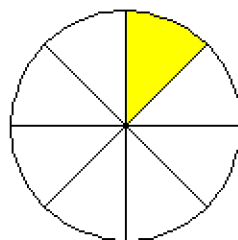
L



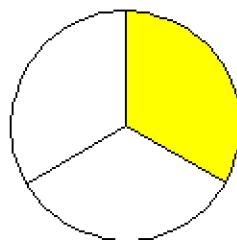
N



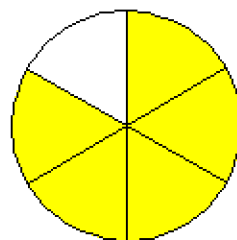
T



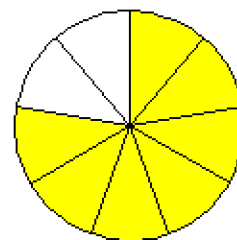
O



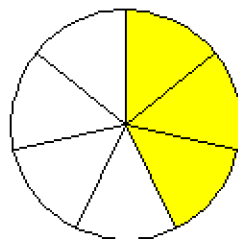
M



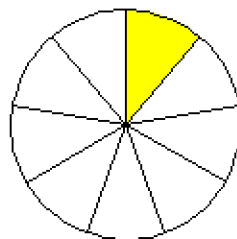
I



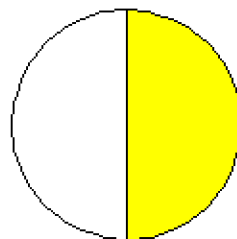
A



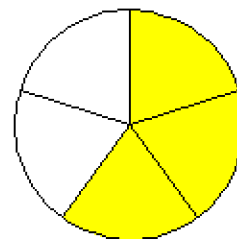
E

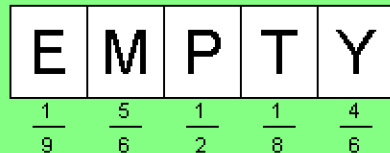
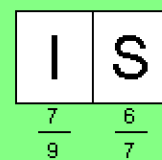
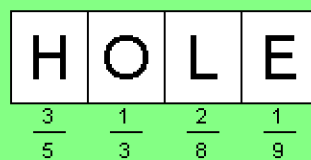
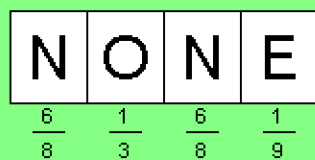


P



H

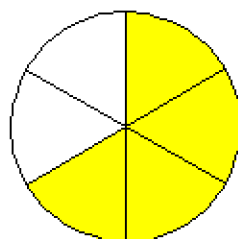




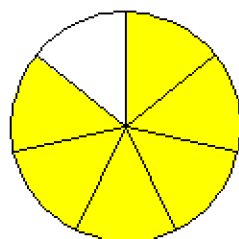
How much dirt is there in a hole 1 foot by 1 foot by 1 foot?

Place each letter in the box with that pie's fraction.

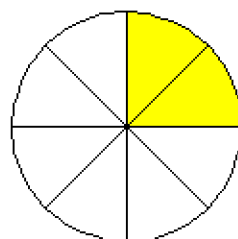
Y



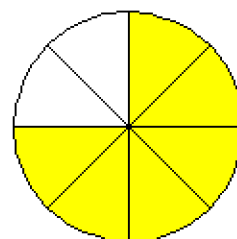
S



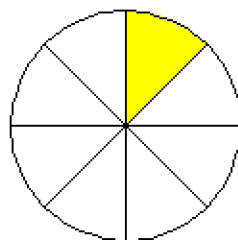
L



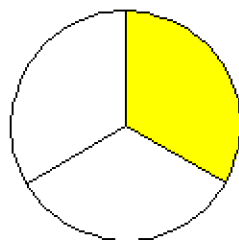
N



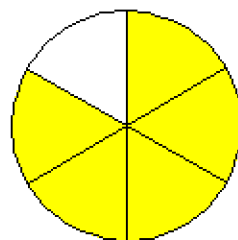
T



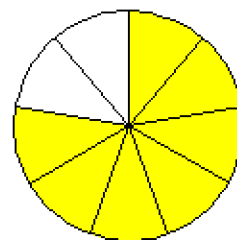
O



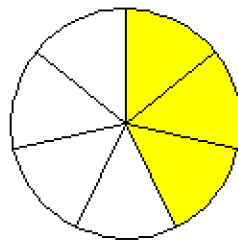
M



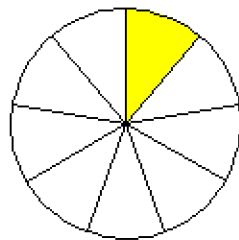
I



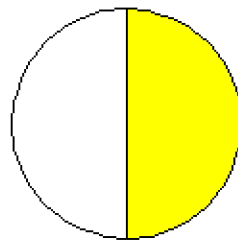
A



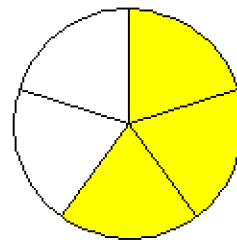
E

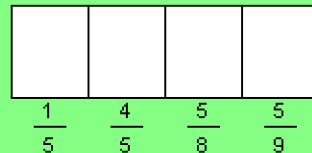
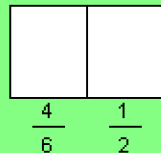
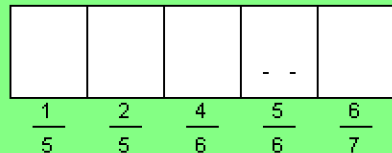
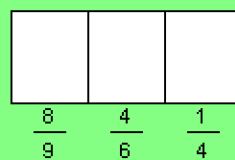
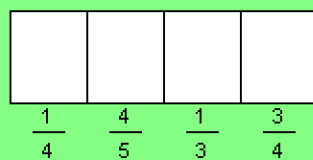
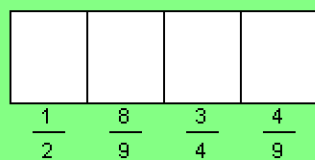


P



H

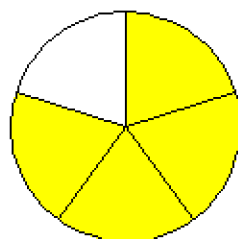




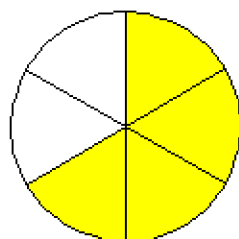
What happened to the kid who ran away with the circus?

Place each letter in the box with that pie's fraction.

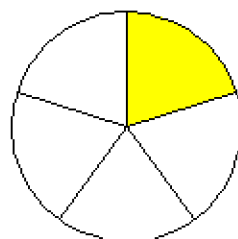
(A)



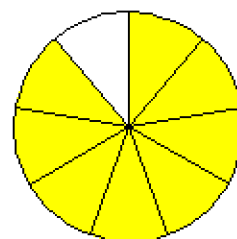
(I)



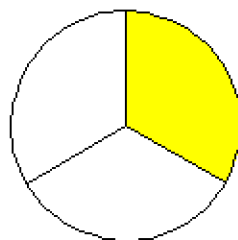
(B)



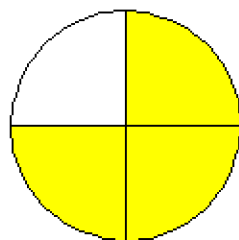
(H)



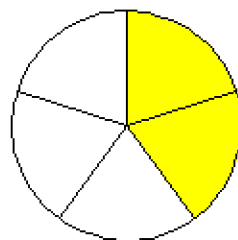
(D)



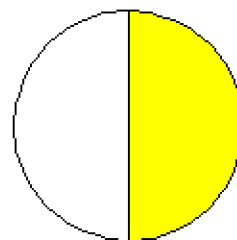
(E)



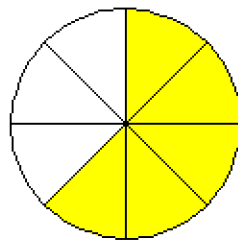
(R)



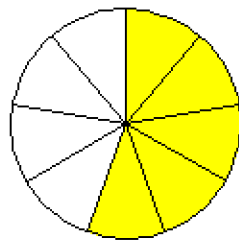
(T)



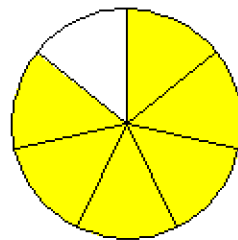
(C)



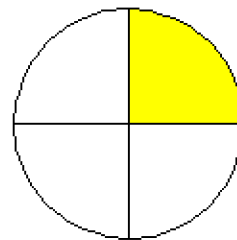
(K)



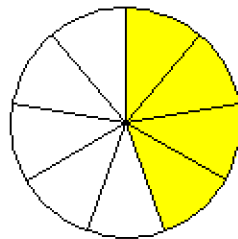
(G)



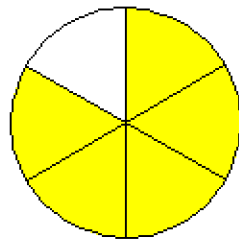
(M)



(Y)



(N)



T H E Y

$\frac{1}{2}$ $\frac{8}{9}$ $\frac{3}{4}$ $\frac{4}{9}$

M A D E

$\frac{1}{4}$ $\frac{4}{5}$ $\frac{1}{3}$ $\frac{3}{4}$

H I M

$\frac{8}{9}$ $\frac{4}{6}$ $\frac{1}{4}$

B R I N G

$\frac{1}{5}$ $\frac{2}{5}$ $\frac{4}{6}$ $\frac{5}{6}$ $\frac{6}{7}$

I T

$\frac{4}{6}$ $\frac{1}{2}$

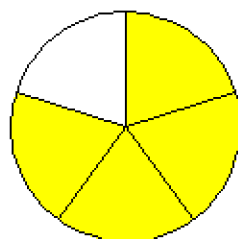
B A C K

$\frac{1}{5}$ $\frac{4}{5}$ $\frac{5}{8}$ $\frac{5}{9}$

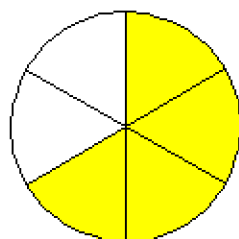
What happened to the kid who ran away with the circus?

Place each letter in the box with that pie's fraction.

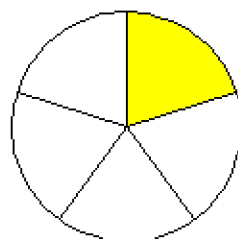
(A)



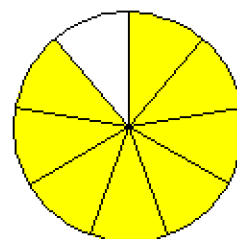
(I)



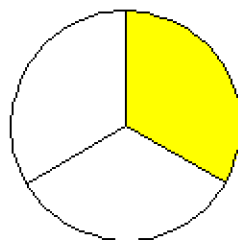
(B)



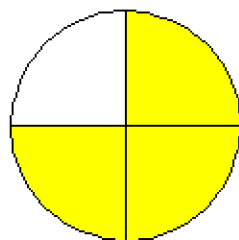
(H)



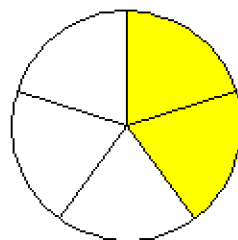
(D)



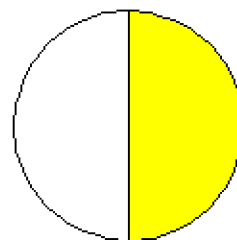
(E)



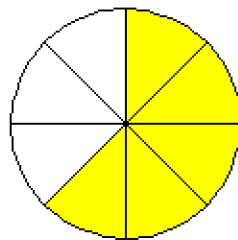
(R)



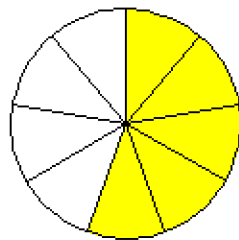
(T)



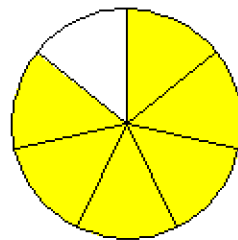
(C)



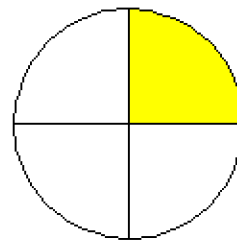
(K)



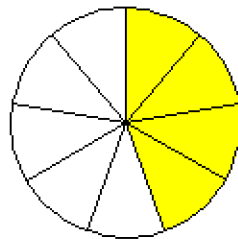
(G)



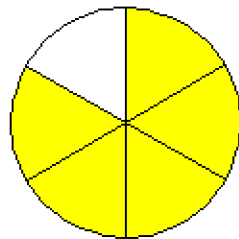
(M)

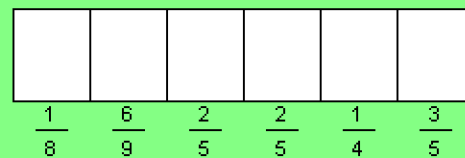
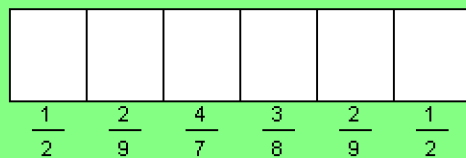
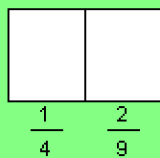


(Y)



(N)

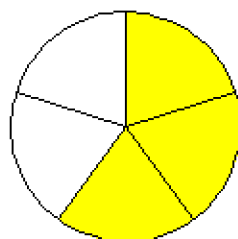




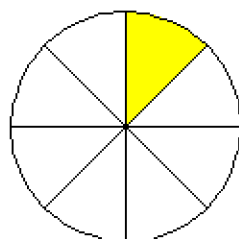
How do you know when a mummy has a cold?

Place each letter in the box with that pie's fraction.

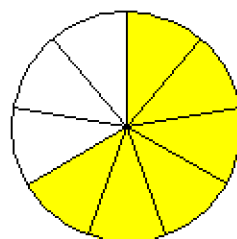
(N)



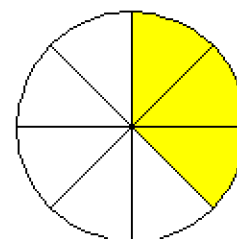
(C)



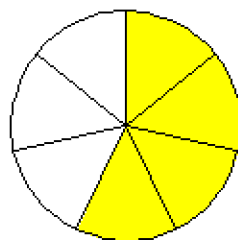
(O)



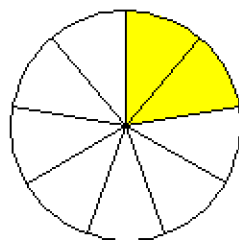
(R)



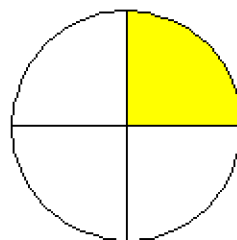
(A)



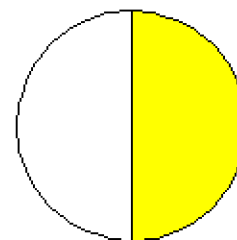
(T)



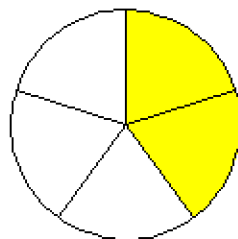
(I)

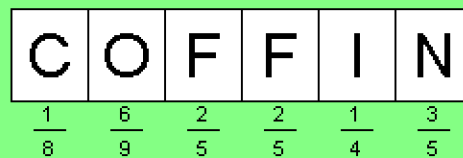
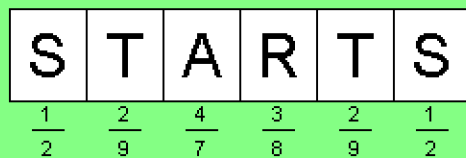
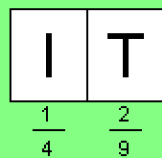


(S)



(F)

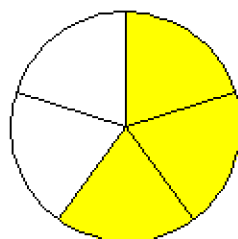




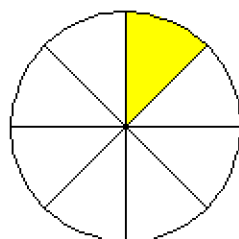
How do you know when a mummy has a cold?

Place each letter in the box with that pie's fraction.

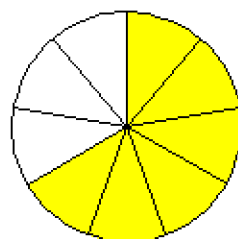
(N)



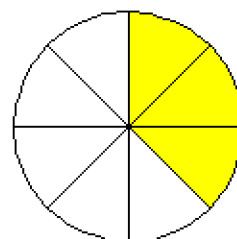
(C)



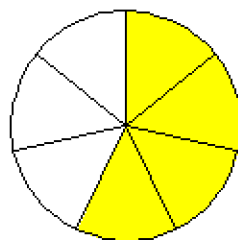
(O)



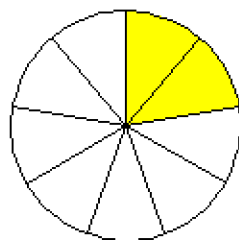
(R)



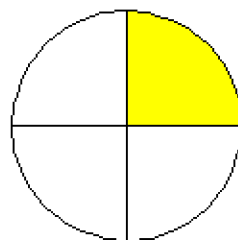
(A)



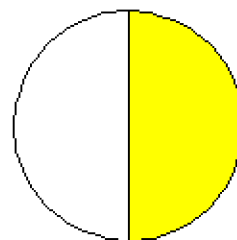
(T)



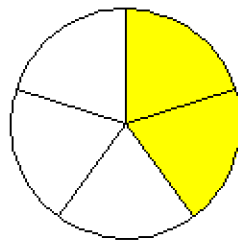
(I)




(S)



(F)





$$3\frac{4}{5} \quad 1\frac{6}{8}$$




$$1\frac{3}{5} \quad 1\frac{6}{8} \quad 3\frac{2}{4} \quad 1\frac{1}{8}$$




$$1\frac{1}{8} \quad 3\frac{3}{8}$$



$$3\frac{1}{5}$$



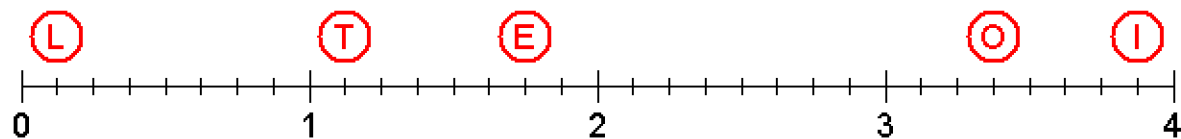
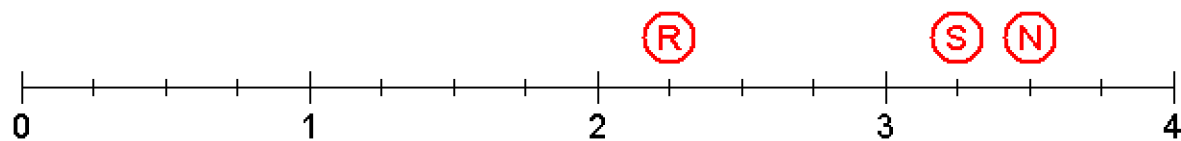
$$2\frac{1}{4} \quad 1\frac{6}{8} \quad 1\frac{1}{8} \quad 3\frac{1}{5} \quad 3\frac{7}{8} \quad \frac{1}{8}$$




$$\frac{13}{4} \quad 1\frac{1}{8} \quad 3\frac{3}{8} \quad 2\frac{1}{4} \quad 1\frac{6}{8}$$

What did the monkey do when he lost his tail?

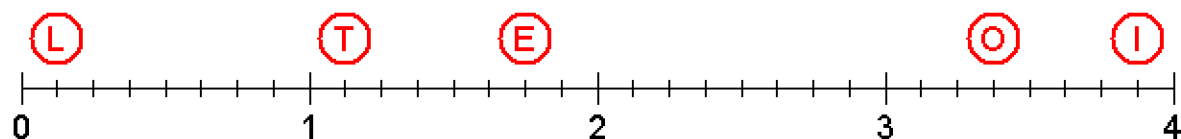
Place each letter in the box that shows its position on the line.





What did the monkey do when he lost his tail?

Place each letter in the box that shows its position on the line.



--	--

$1\frac{2}{8}$

$3\frac{2}{3}$

--	--	--	--	--	--

$1\frac{1}{8}$

$\frac{9}{4}$

$1\frac{2}{3}$

$\frac{7}{3}$

$3\frac{2}{3}$

$\frac{1}{3}$

--	--

$\frac{7}{3}$

$2\frac{3}{8}$

--	--	--	--	--

$3\frac{1}{3}$

$\frac{9}{4}$

$2\frac{5}{8}$

$1\frac{7}{8}$

$3\frac{2}{3}$

--	--	--	--

$\frac{2}{3}$

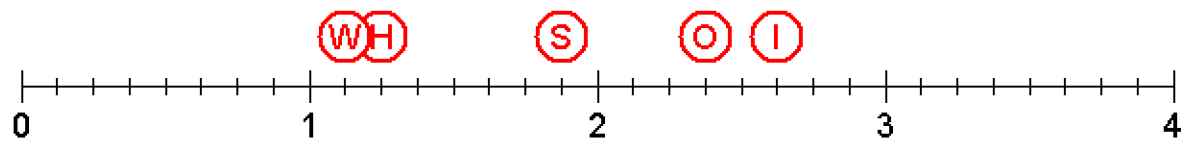
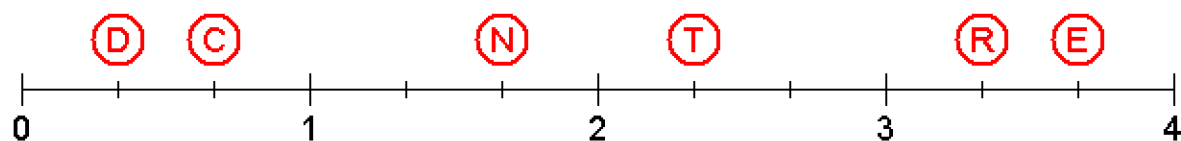
$\frac{9}{4}$

$1\frac{2}{3}$

$3\frac{2}{3}$

Why did the farmer plant sugar cubes?

Place each letter in the box that shows its position on the line.



H E

$1\frac{2}{8}$ $3\frac{2}{3}$

W A N T E D

$1\frac{1}{8}$ $\frac{9}{4}$ $1\frac{2}{3}$ $\frac{7}{3}$ $3\frac{2}{3}$ $\frac{1}{3}$

T O

$\frac{7}{3}$ $2\frac{3}{8}$

R A I S E

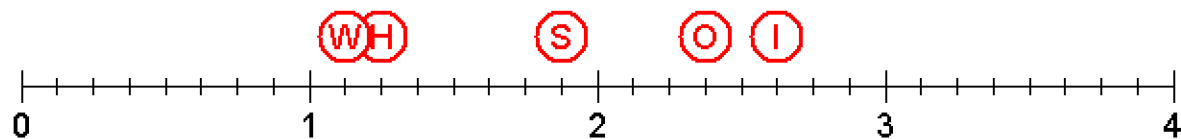
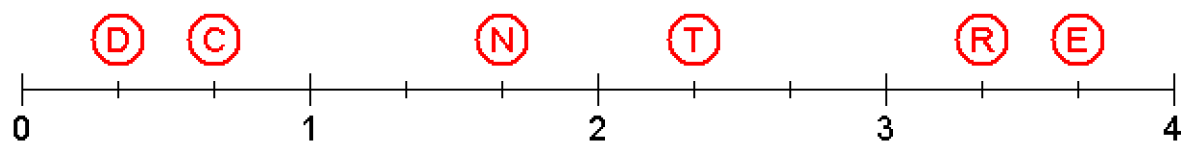
$3\frac{1}{3}$ $\frac{9}{4}$ $2\frac{5}{8}$ $1\frac{7}{8}$ $3\frac{2}{3}$


C A N E

$\frac{2}{3}$ $\frac{9}{4}$ $1\frac{2}{3}$ $3\frac{2}{3}$


Why did the farmer plant sugar cubes?

Place each letter in the box that shows its position on the line.





$$\frac{2}{3} \quad \frac{12}{5} \quad 2\frac{4}{8}$$




$$\frac{9}{8} \quad \frac{8}{3} \quad \frac{2}{3}$$



$$2\frac{2}{8} \quad \frac{8}{3} \quad \frac{8}{3} \quad 1\frac{1}{3}$$



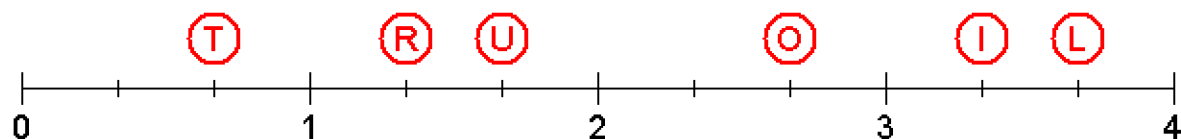
$$3\frac{2}{8} \quad \frac{12}{5} \quad 1\frac{2}{3} \quad \frac{2}{3}$$



$$1\frac{4}{8} \quad 3\frac{1}{3} \quad 3\frac{2}{3} \quad 3\frac{2}{3}$$

How can you tell if an elephant is in your refrigerator?

Place each letter in the box that shows its position on the line.



T	H	E
---	---	---

$\frac{2}{3}$	$\frac{12}{5}$	$2\frac{4}{8}$
---------------	----------------	----------------

D	O	O	R
---	---	---	---

$2\frac{2}{8}$	$\frac{8}{3}$	$\frac{8}{3}$	$1\frac{1}{3}$
----------------	---------------	---------------	----------------

W	I	L	L
---	---	---	---

$1\frac{4}{8}$	$3\frac{1}{3}$	$3\frac{2}{3}$	$3\frac{2}{3}$
----------------	----------------	----------------	----------------

N	O	T
---	---	---

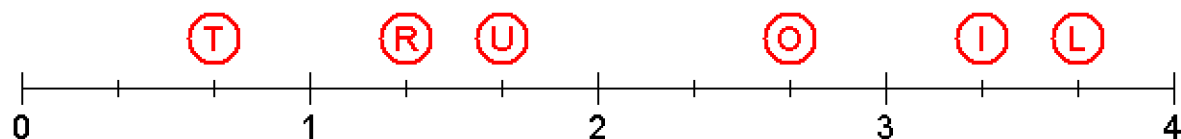
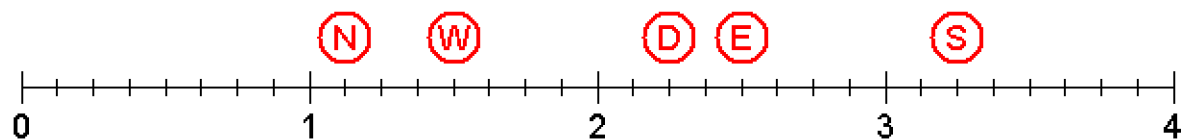
$\frac{9}{8}$	$\frac{8}{3}$	$\frac{2}{3}$
---------------	---------------	---------------

S	H	U	T
---	---	---	---

$3\frac{2}{8}$	$\frac{12}{5}$	$1\frac{2}{3}$	$\frac{2}{3}$
----------------	----------------	----------------	---------------

How can you tell if an elephant is in your refrigerator?

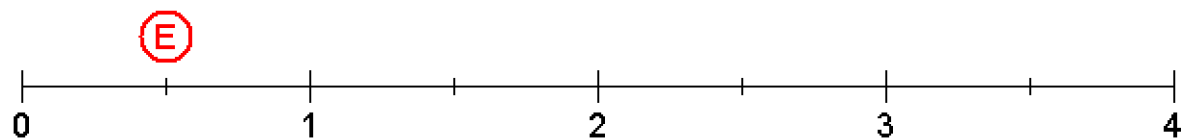
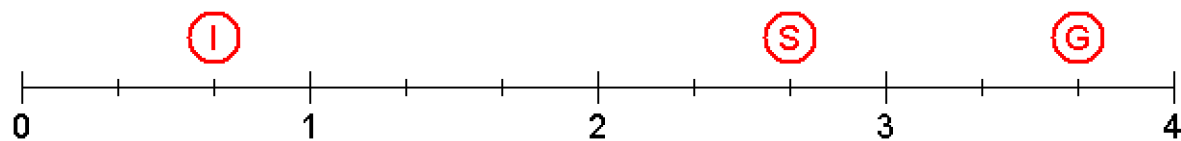
Place each letter in the box that shows its position on the line.



$\frac{3}{5}$	$\frac{2}{3}$	$\frac{1}{5}$	$\frac{1}{5}$	$\frac{1}{2}$	$\frac{19}{5}$	$2\frac{4}{5}$	$3\frac{2}{5}$	$\frac{11}{3}$	$2\frac{2}{3}$

What do you call nervous insects?

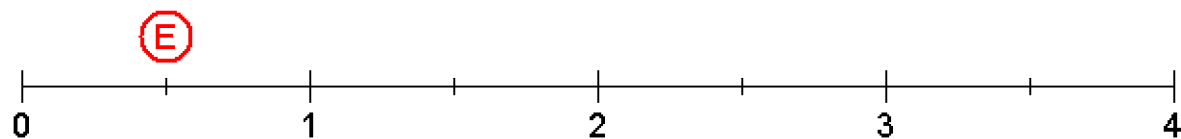
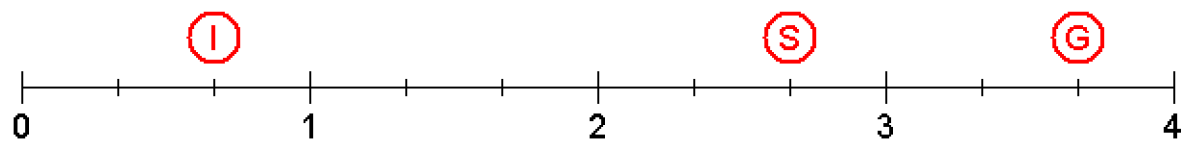
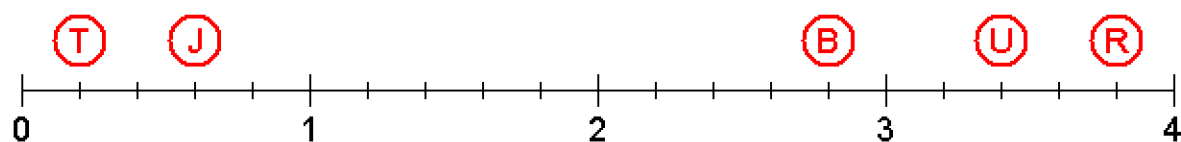
Place each letter in the box that shows its position on the line.




J	I	T	T	E	R	B	U	G	S
$\frac{3}{5}$	$\frac{2}{3}$	$\frac{1}{5}$	$\frac{1}{5}$	$\frac{1}{2}$	$\frac{19}{5}$	$2\frac{4}{5}$	$3\frac{2}{5}$	$\frac{11}{3}$	$2\frac{2}{3}$


What do you call nervous insects?

Place each letter in the box that shows its position on the line.







$$2\frac{3}{5} \quad \frac{3}{5} \quad 2\frac{2}{5}$$




$$\frac{3}{8} \quad \frac{3}{5} \quad 1\frac{1}{2} \quad 1\frac{3}{5} \quad 1\frac{1}{5} \quad 3\frac{3}{8}$$



$$1\frac{1}{5} \quad 2\frac{3}{8}$$



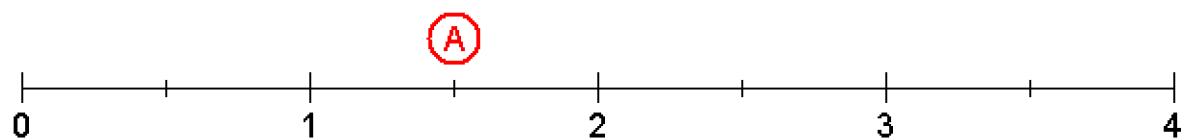
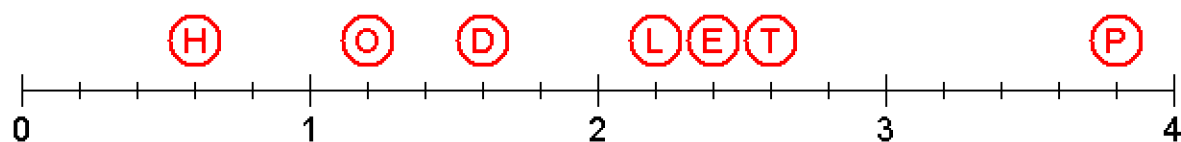
$$1\frac{1}{2} \quad \frac{7}{8}$$



$$2\frac{2}{5} \quad 2\frac{1}{5} \quad 2\frac{2}{5} \quad \frac{19}{5} \quad \frac{3}{5} \quad 1\frac{1}{2} \quad \frac{7}{8} \quad 2\frac{3}{5}$$

What is as big as an elephant but doesn't weigh anything?

Place each letter in the box that shows its position on the line.



T H E

$2\frac{3}{5}$ $\frac{3}{5}$ $2\frac{2}{5}$

S H A D O W

$\frac{3}{8}$ $\frac{3}{5}$ $1\frac{1}{2}$ $1\frac{3}{5}$ $1\frac{1}{5}$ $3\frac{3}{8}$

O F

$1\frac{1}{5}$ $2\frac{3}{8}$

A N

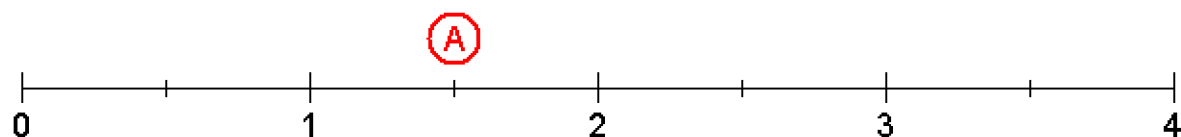
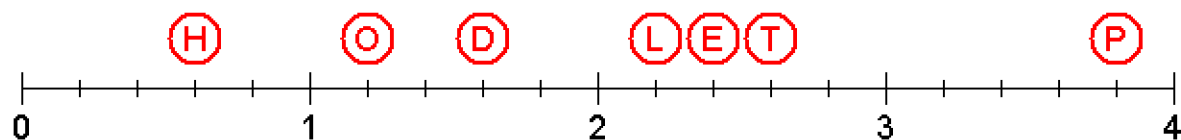
$1\frac{1}{2}$ $\frac{7}{8}$

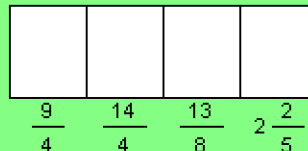
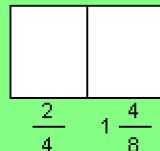
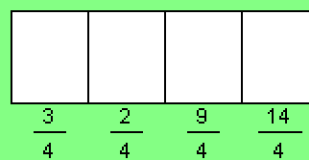
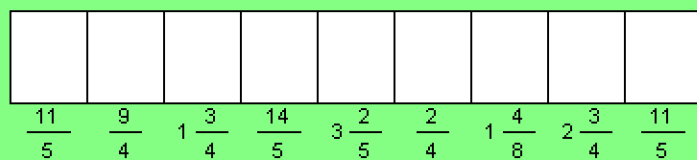
E L E P H A N T

$2\frac{2}{5}$ $2\frac{1}{5}$ $2\frac{2}{5}$ $\frac{19}{5}$ $\frac{3}{5}$ $1\frac{1}{2}$ $\frac{7}{8}$ $2\frac{3}{5}$

What is as big as an elephant but doesn't weigh anything?

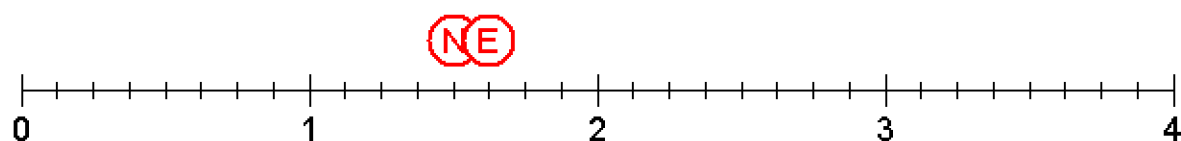
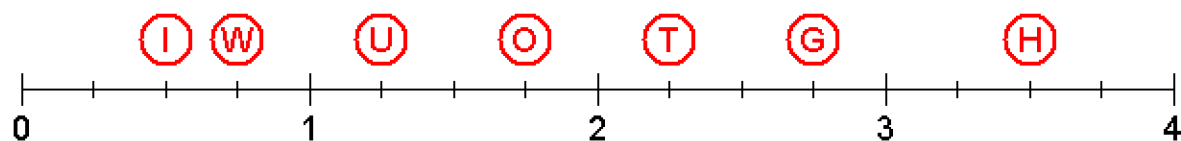
Place each letter in the box that shows its position on the line.





What are the best stockings for playing baseball?

Place each letter in the box that shows its position on the line.



S T O C K I N G S

$\frac{11}{5}$ $\frac{9}{4}$ $1\frac{3}{4}$ $\frac{14}{5}$ $3\frac{2}{5}$ $\frac{2}{4}$ $1\frac{4}{8}$ $2\frac{3}{4}$ $\frac{11}{5}$

W I T H

$\frac{3}{4}$ $\frac{2}{4}$ $\frac{9}{4}$ $\frac{14}{4}$

R U N S

$1\frac{1}{5}$ $1\frac{1}{4}$ $1\frac{4}{8}$ $\frac{11}{5}$

I N

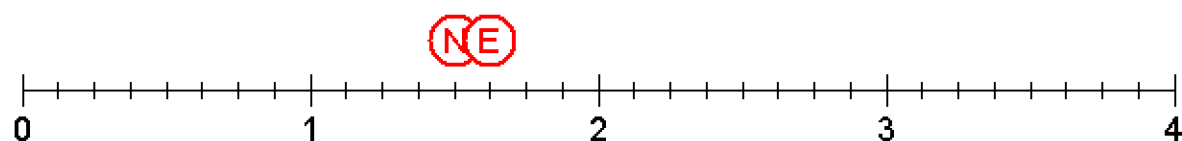
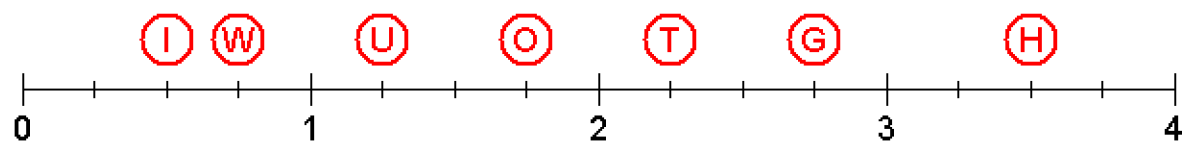
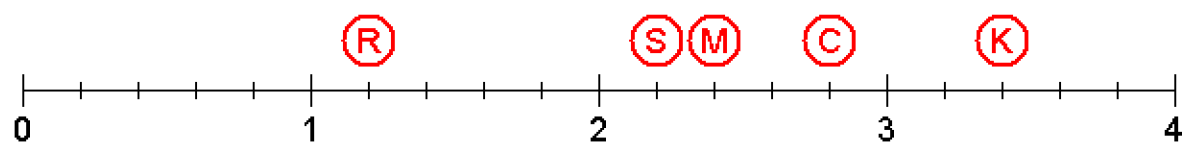
$\frac{2}{4}$ $1\frac{4}{8}$

T H E M

$\frac{9}{4}$ $\frac{14}{4}$ $\frac{13}{8}$ $2\frac{2}{5}$

What are the best stockings for playing baseball?

Place each letter in the box that shows its position on the line.



--	--	--	--

$$3\frac{1}{2} \quad 1\frac{4}{5} \quad \frac{13}{5} \quad \frac{1}{2}$$

--

$$3\frac{2}{5}$$

--	--	--	--	--

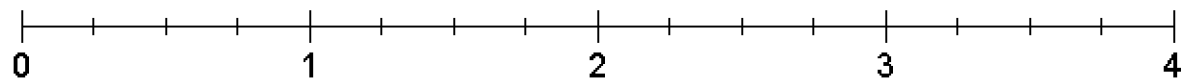
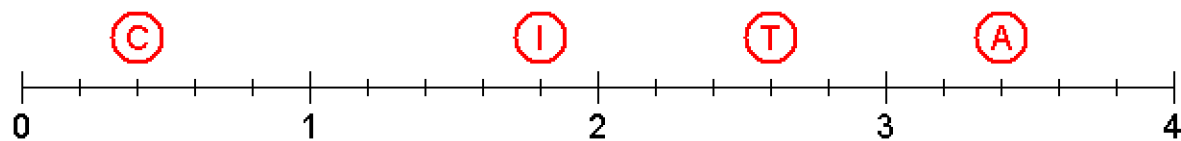
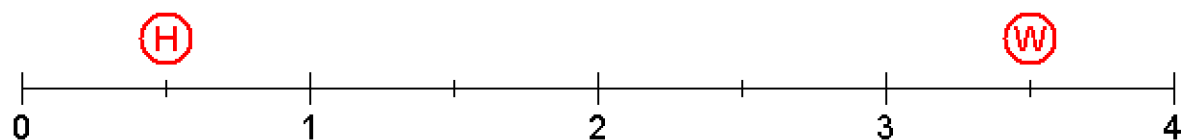
$$3\frac{1}{2} \quad 1\frac{4}{5} \quad \frac{13}{5} \quad \frac{2}{5} \quad \frac{1}{2}$$

--	--	--	--	--

$$3\frac{1}{2} \quad 3\frac{2}{5} \quad \frac{13}{5} \quad \frac{2}{5} \quad \frac{1}{2}$$

How does a witch tell time?

Place each letter in the box that shows its position on the line.



W I T H

$$3\frac{1}{2} \quad 1\frac{4}{5} \quad \frac{13}{5} \quad \frac{1}{2}$$

A

$$3\frac{2}{5}$$

W I T C H

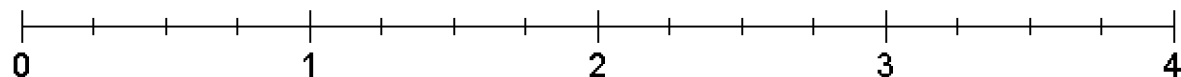
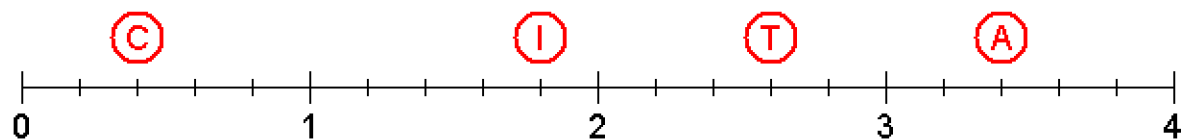
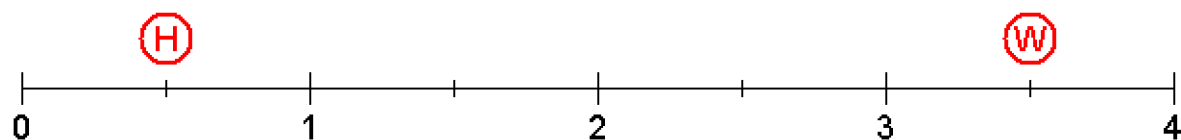
$$3\frac{1}{2} \quad 1\frac{4}{5} \quad \frac{13}{5} \quad \frac{2}{5} \quad \frac{1}{2}$$

W A T C H

$$3\frac{1}{2} \quad 3\frac{2}{5} \quad \frac{13}{5} \quad \frac{2}{5} \quad \frac{1}{2}$$


How does a witch tell time?

Place each letter in the box that shows its position on the line.





$$\frac{2}{3}$$



$$2\frac{4}{6}$$

$$\frac{19}{6}$$


$$\frac{2}{3}$$

$$2\frac{4}{6}$$

$$2\frac{1}{3}$$

$$1\frac{2}{3}$$

$$3\frac{1}{2}$$



$$\frac{11}{3}$$

$$\frac{3}{6}$$

$$1\frac{1}{2}$$

$$3\frac{1}{3}$$

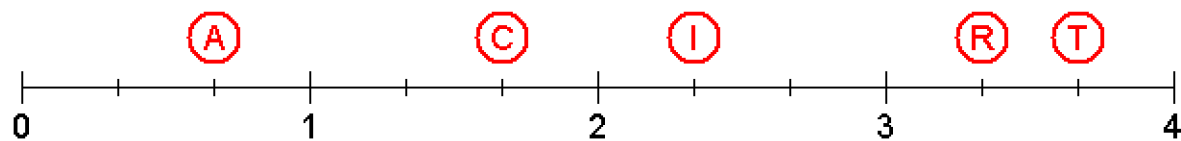
$$2\frac{1}{3}$$

$$2\frac{4}{6}$$

$$\frac{11}{3}$$

What is green, has two legs and a trunk?

Place each letter in the box that shows its position on the line.



A

$$\frac{2}{3}$$

S

$$2\frac{4}{6}$$

E

$$\frac{19}{6}$$

A

$$\frac{2}{3}$$

S

$$2\frac{4}{6}$$

I

$$2\frac{1}{3}$$

C

$$1\frac{2}{3}$$

K

$$3\frac{1}{2}$$

T

$$\frac{11}{3}$$

O

$$\frac{3}{6}$$

U

$$1\frac{1}{2}$$

R

$$3\frac{1}{3}$$

I

$$2\frac{1}{3}$$

S

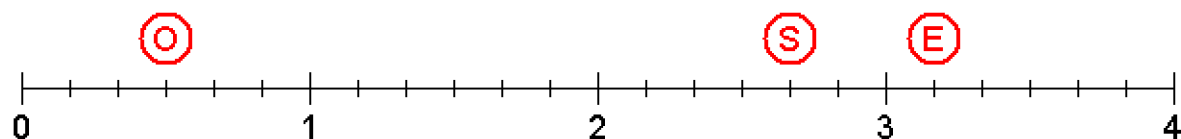
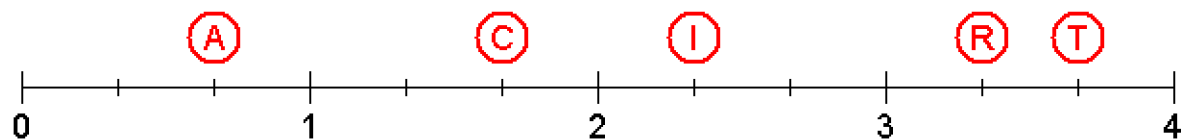
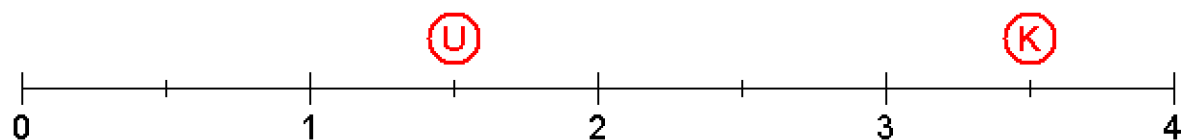
$$2\frac{4}{6}$$

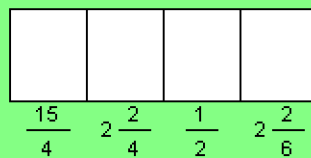
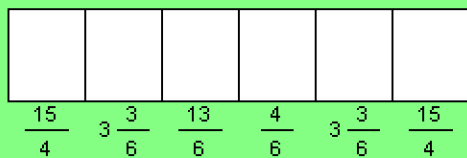
T

$$\frac{11}{3}$$

What is green, has two legs and a trunk?

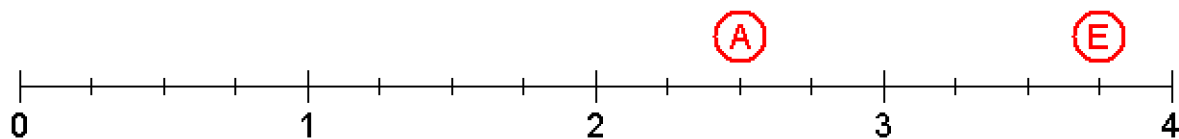
Place each letter in the box that shows its position on the line.





What kind of ears do trains have?

Place each letter in the box that shows its position on the line.



E	N	G	I	N	E
---	---	---	---	---	---

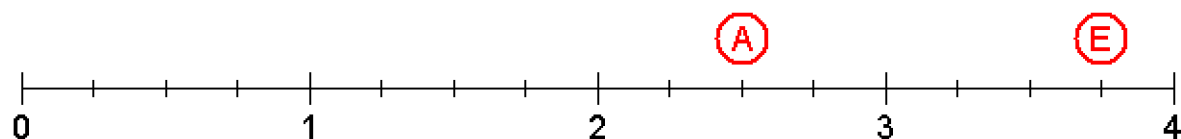
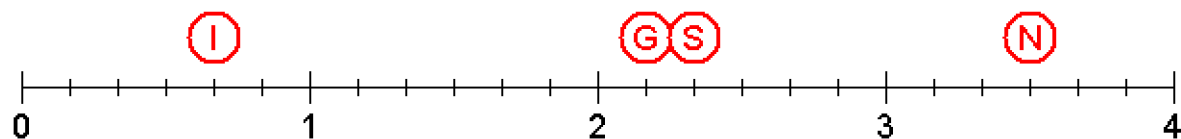
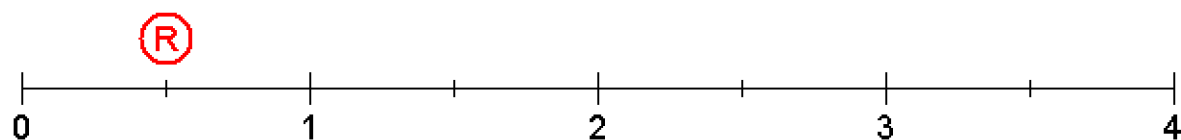
$\frac{15}{4}$	$3\frac{3}{6}$	$\frac{13}{6}$	$\frac{4}{6}$	$3\frac{3}{6}$	$\frac{15}{4}$
----------------	----------------	----------------	---------------	----------------	----------------


E	A	R	S
---	---	---	---

$\frac{15}{4}$	$2\frac{2}{4}$	$\frac{1}{2}$	$2\frac{2}{6}$
----------------	----------------	---------------	----------------

What kind of ears do trains have?

Place each letter in the box that shows its position on the line.






$$\frac{11}{5} \quad 2\frac{7}{8} \quad 1\frac{1}{5}$$



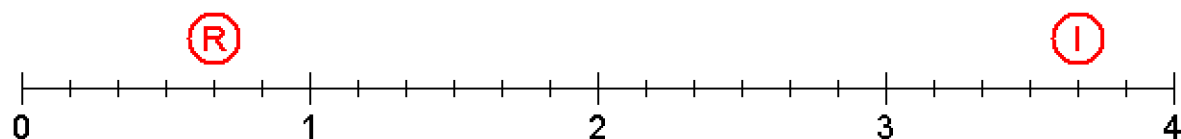
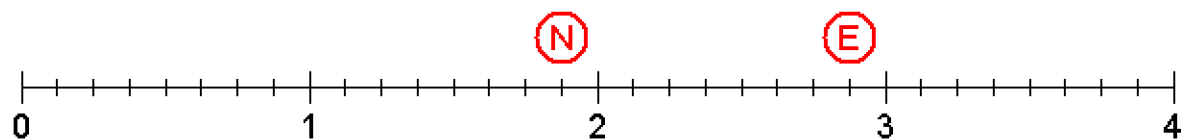
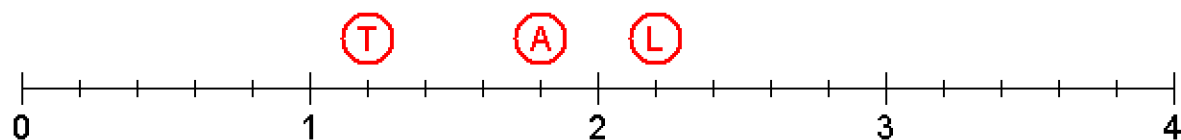
$$3\frac{4}{6} \quad 1\frac{1}{5}$$



$$\frac{4}{6} \quad 1\frac{4}{5} \quad 3\frac{4}{6} \quad 1\frac{7}{8}$$

What do gorillas do when it rains?

Place each letter in the box that shows its position on the line.



L	E	T
---	---	---

$$\frac{11}{5} \quad 2\frac{7}{8} \quad 1\frac{1}{5}$$

I	T
---	---

$$3\frac{4}{6} \quad 1\frac{1}{5}$$

R	A	I	N
---	---	---	---

$$\frac{4}{6} \quad 1\frac{4}{5} \quad 3\frac{4}{6} \quad 1\frac{7}{8}$$

What do gorillas do when it rains?

Place each letter in the box that shows its position on the line.

