


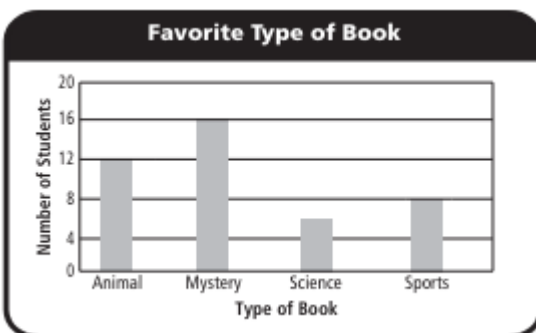
Third Grade Review - Chapter 2

Favorite Sport	
Sport	Tally
Soccer	
Baseball	
Football	

1. How many students chose football and baseball combined?
2. How many fewer students chose football than chose soccer?

Favorite Ice Pop Flavor	
Orange	
Lemon	
Blueberry	
Strawberry	
Key: Each  = 2 votes.	

1. How many fewer people chose lemon than chose strawberry?
2. How many people in all were surveyed?



1. How many students in all answered the survey?
2. Did more students choose books about mystery or books about science and sports together?

Use the results in the table to make a bar graph.

Favorite Summer Sport	
Sport	Number of Votes
Swimming	15
Inline Skating	10
Cycling	20

First name: _____ Last name: _____

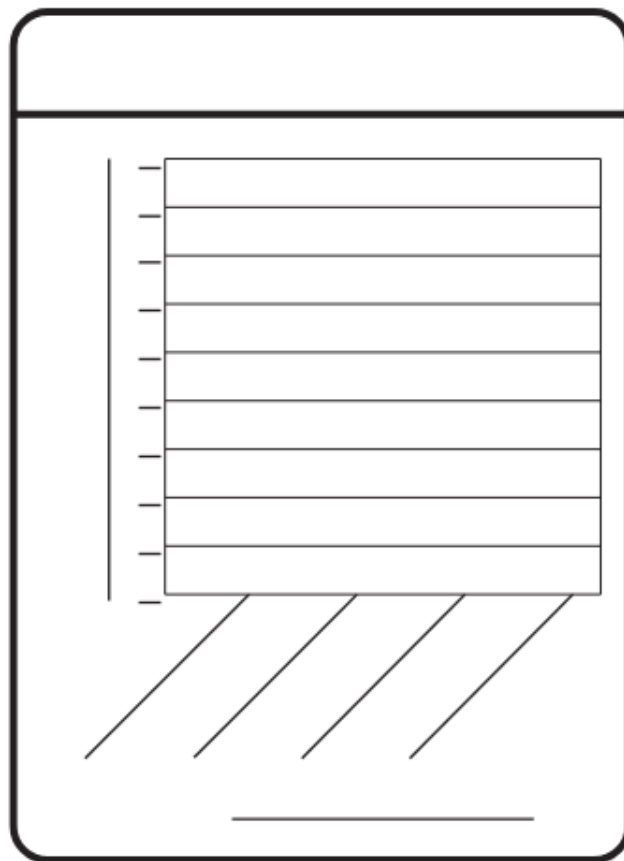
Third Grade Review - Chapter 2

1. Make a bar graph to show the results of the survey.

Field Trip Choices	
Location	Number of Students
Art Museum	15
Science Center	21
Computer Museum	12
Zoo	24

2. How many students in all were surveyed?

3. Which location was chosen twice as often as computer museum?



Use the Spelling Test Scores line plot for 1–3.

1. Which test score did the most students receive?

2. How many more students scored 90 than 100?

3. How many students in all took the spelling test?

